


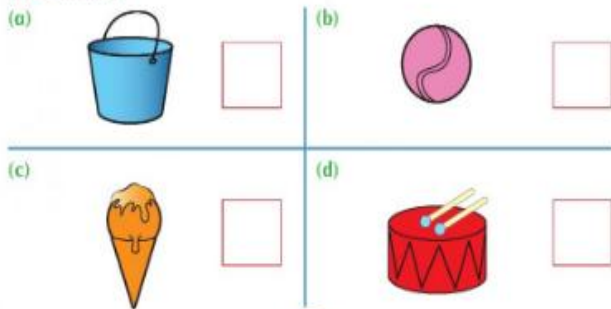
Senior Infants

Colour the buckets blue.
Colour the cones orange.

Colour the balls pink.
Colour the drums red.




How many?



25

How many? Colour. Draw.

red orange yellow



apples oranges bananas

Draw correct number of each.

apples	<input type="text"/>	<input type="text"/>	<input type="text"/>	<input type="text"/>	<input type="text"/>	<input type="text"/>
oranges	<input type="text"/>	<input type="text"/>	<input type="text"/>	<input type="text"/>	<input type="text"/>	<input type="text"/>
bananas	<input type="text"/>	<input type="text"/>	<input type="text"/>	<input type="text"/>	<input type="text"/>	<input type="text"/>

There are **more** apples than _____.
There are **fewer** apples than _____.
There are **more** _____ than apples.

56

THE SHOP

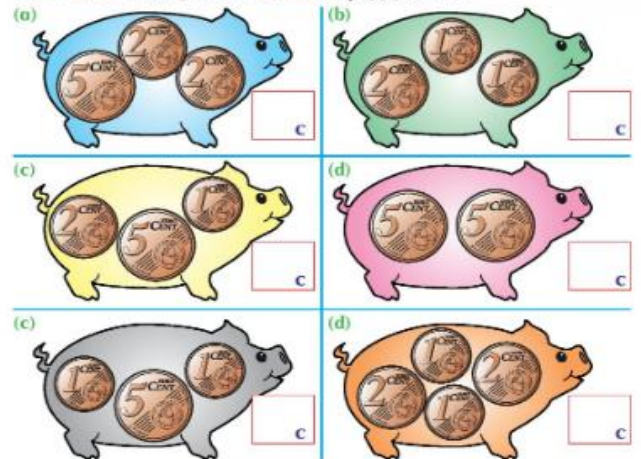


How much money did each person spend?

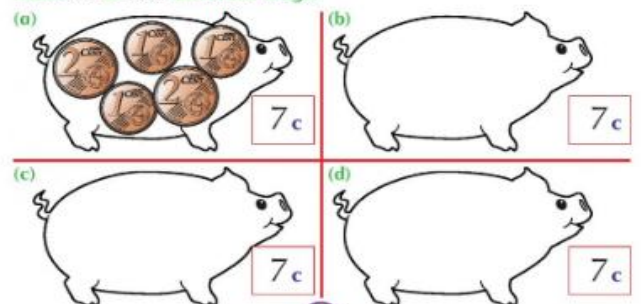
- (a) Paul bought and a . spent c
- (b) Ann bought a and a . spent c
- (c) Susan bought an and . spent c
- (d) Jim bought a and an . spent c
- (e) Jill bought a and a . spent c
- (f) Jack bought a and . spent c

48

How much money is there in each piggy bank?



Make 7c in four different ways.



49