






Match

Match the coins to the correct amount of cent.

























	2c
	5c
	1c
	20c
	10c

Write the correct amount under each coin.




				
_____ c	_____ c	_____ c	_____ c	_____ c

Colour

Colour the correct amount in each row.





					
					
					
					

Draw the correct amount in each piggy bank.

		
2c	3c	4c

Count

How much in each piggy bank?




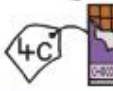


<p>A</p>  <p>_____ c</p>	<p>B</p>  <p>_____ c</p>
<p>C</p>  <p>_____ c</p>	<p>D</p>  <p>_____ c</p>

Which piggy bank has the **most** money?

Which piggy bank has the **least** money?

Add

SWEET SHOP

Ben buys

$$\begin{array}{r} \text{Banana} \quad 3 \text{ c} \\ + \text{Ice cream} \quad 5 \text{ c} \\ \hline \end{array}$$

He spends c

Evan buys

$$\begin{array}{r} \text{Candy} \quad 2 \text{ c} \\ + \text{Cake} \quad 3 \text{ c} \\ \hline \end{array}$$

He spends c

Anna buys

$$\begin{array}{r} \text{Chocolate} \quad 4 \text{ c} \\ + \text{Crisps} \quad 6 \text{ c} \\ \hline \end{array}$$

She spends c

Liam buys

$$\begin{array}{r} \text{Cake} \quad 3 \text{ c} \\ + \text{Banana} \quad 3 \text{ c} \\ \hline \end{array}$$

He spends c

Who spent the **most** money? _____

Who spent the **least** money? _____